



# 5 LESSON

## SOLVING CUBIC EQUATIONS

A cubic expression is an expression of the form  $ax^3 + bx^2 + cx + d$ . The following are all examples of expressions we will be working with:

$$2x^3 - 16, \quad x^3 - 2x^2 - 3x, \quad x^3 + 4x^2 - 16, \quad 2x^3 + x - 3.$$

Remember that some quadratic expressions can be factorised into two linear factors:

e.g.  $2x^2 - 3x + 1 = (2x - 1)(x - 1)$   
Quadratic      Linear    Linear

Now, a cubic expression may be factorised into

- (i) a linear factor and a quadratic factor    or    (ii) three linear factors.

For example, you can easily verify, by multiplying out the right hand side that:

(i)  $x^3 - 8 = (x - 2)(x^2 + 2x + 4)$   
Linear      Quadratic

(ii)  $4x^3 - 4x^2 - x + 1 = (x - 1)(2x - 1)(2x + 1)$   
Linear    Linear    Linear

There are three types of factorisation methods we will consider:

- Common factor
- Grouping terms
- Factor theorem

### Type 1 - Common factor

In this type there would be no constant term.

Example



### Example 1

Solve for  $x$ :  $x^3 + 5x^2 - 14x = 0$

Solution



### Solution

$$\begin{aligned} x(x^2 + 5x - 14) &= 0 \\ \therefore x(x + 7)(x - 2) &= 0 \\ \therefore x = 0, x = 2, x = -7 \end{aligned}$$

### Type 2 - Grouping terms

With this type, we must have all four terms of the cubic expression. We then pair terms with a common factor and see if a common bracket emerges.

Example



### Example 2

Solve for  $x$ :  $x^3 + 2x^2 - 9x - 18 = 0$

Solution



### Solution:

$$\begin{aligned} (x^3 + 2x^2) - (9x + 18) &= 0 \\ \therefore x^2(x + 2) - 9(x + 2) &= 0 \end{aligned}$$



$$\begin{aligned}\therefore (x + 2)(x^2 - 9) &= 0 \\ \therefore (x + 2)(x - 3)(x + 3) &= 0 \\ \therefore x = -2, x = 3, x = -3\end{aligned}$$

Type 3 - Using the factor theorem

N.B. If  $(x - a)$  is a factor of the cubic expression, then  $f(a) = 0$ .

So, we substitute in values of  $x = \pm 1, \pm 2 \dots$  etc until we find a value which makes the expression equal to 0.

### Example 3

Solve for  $x$ :  $x^3 - 5x + 2 = 0$

#### Solution

$$\text{Try } x = 1: \quad 1^3 - 5(1) + 2 = -2$$

$$\text{Try } x = -1: \quad (-1)^3 - 5(-1) + 2 = 6$$

$$\text{Try } x = 2: \quad 2^3 - 5(2) + 2 = 0 \quad \therefore (x - 2) \text{ is a factor}$$

$$\therefore (x - 2)(\text{quadratic}) = x^3 - 5x + 2$$

$$(x - 2)(x^2 + kx - 1) = x^3 - 5x + 2 \text{ by inspection.}$$

$$\text{Compare } x \text{ terms on LHS and RHS:} \quad -5x = -x - 2kx$$

$$\therefore -5 = -1 - 2k$$

$$\therefore k = 2$$

$$\therefore x^3 - 5x + 2 = (x - 2)(x^2 + 2x - 1) = 0$$

$$x = 2 \text{ or } x = -1 \pm \sqrt{2} \text{ (using the quadratic formula)}$$

Alternatively, you can use long division to get the factors of  $x^3 - 5x + 2$



Example



Solution

### Example 4

Solve for  $x$ :  $2x^3 - 3x^2 - 8x - 3 = 0$

#### Solution

$$\text{Try } x = 1: \quad 2(1)^3 - 3(1)^2 - 8(1) - 3 = -12$$

$$\text{Try } x = -1: \quad 2(-1)^3 - 3(1)^2 - 8(-1) - 3 = 0 \quad \therefore (x + 1) \text{ is a factor}$$

$$\therefore (x + 1)(2x^2 + kx - 3) = 2x^3 - 3x^2 - 8x - 3$$

Compare  $x^2$  terms on both sides:

(N.B. It does not matter whether you compare  $x^2$  or  $x$  terms)

$$-3x^2 = 2x^2 + kx^2$$

$$\therefore -3 = 2 + k$$

$$\therefore k = -5$$

$$\therefore (x + 1)(2x^2 - 5x - 3) = 2x^3 - 3x^2 - 8x - 3 = 0$$

$$\therefore (x + 1)(2x + 1)(x - 3) = 0$$

$$\therefore x = -1, x = -\frac{1}{2}, x = 3$$



Example



Solution

Solve for  $x$ :

1.  $2x^3 - x^2 - x = 0$

---

---

---

2.  $x^3 - x = 0$

---

---

---

3.  $\frac{2}{3}x^3 - 18 = 0$

---

---

---

4.  $x^3 + 3x^2 - 4x - 12 = 0$

---

---

---

5.  $x^3 - 3x - 2 = 0$

---

---

---

6.  $2x^3 + 5x^2 - 14x - 8 = 0$

---

---

---

7.  $x^3 + 7x^2 - 36 = 0$

---

---

---



8.  $4x^3 + 12x^2 + 9x + 2 = 0$

9.  $x^3 - 2x^2 - 4x + 3 = 0$

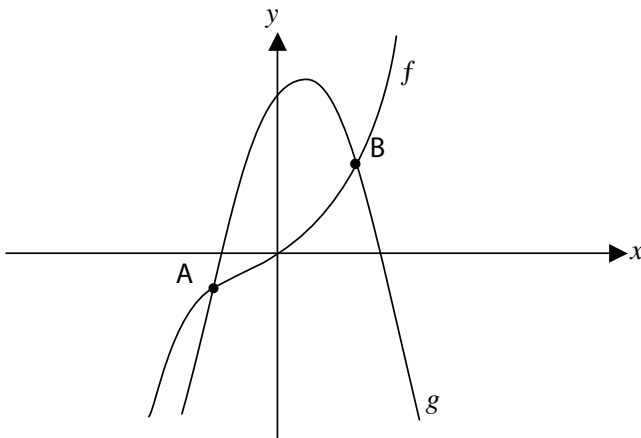
Activity 2

 Activity

1. Given that:  $f(x) = 6x^3 - 37x^2 + 5x + 6$  and  $f(6) = 0$ , solve for  $x$ , if  $f(x) = 0$

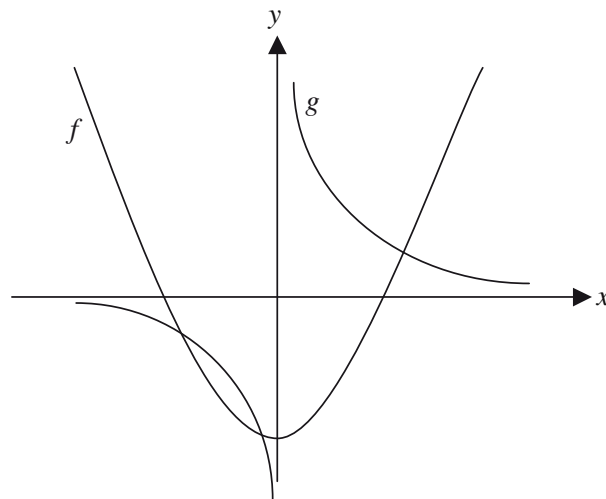
2. Solve for  $x$  and  $y$  if:  
 $y = x^3 + 9x^2 + 26x + 16$  and  $y - 3x = 1$

3. In the diagram:  $f(x) = x^3$  and  $g(x) = -3x^2 + x + 3$



Determine the coordinates of A and B, the points of intersection of  $f$  and  $g$ .

4. In the diagram:  $f(x) = x^2 - 7$  and  $g(x) = \frac{6}{x}$



Make use of the diagram, and a cubic equation, to solve the inequality:

$$\frac{6}{x} \geq x^2 - 7$$

## Solutions to Activities

### Activity 1

1.  $2x^3 - x^2 - x = 0$   
 $\therefore x(2x^2 - x - 1) = 0$   
 $\therefore x(2x + 1)(x - 1) = 0$   
 $\therefore x = 0$  or  $x = -\frac{1}{2}$  or  $x = 1$
2.  $x^3 - x = 0$   
 $\therefore x(x^2 - 1) = 0$   
 $\therefore x(x - 1)(x + 1) = 0$   
 $\therefore x = 0$  or  $x = \pm 1$

3.  $\frac{2}{3}x^3 - 18 = 0$

$\therefore 2x^3 - 54 = 0$

$\therefore 2x^3 = 54$

$\therefore x^3 = 27$

$\therefore x = 7$

4.  $x = 2$  is a solution since  $2^3 + 3(2)^2 - 4(2) - 12 = 0$

$\therefore (x - 2)(x^2 + kx + 6) = x^3 + 3x^2 - 4x - 12$

Compare  $x$  terms on LHS and RHS:

$-2kx + 6x = -4x$

$\therefore -2k + 6 = -4$

$\therefore -2k = -10$

$\therefore k = 5$

$\therefore x^3 + 3x^2 - 4x - 12 = (x - 2)(x^2 + 5x + 6)$

$\therefore (x - 2)(x + 3)(x + 2) = 0$

$\therefore x = -3$  or  $x = \pm 2$

5.  $x = -1$  is a solution since  $(-1)^3 - 3(-1) - 2 = 0$

$\therefore (x + 1)(x^2 + kx - 2) = x^3 - 3x - 2$

Compare  $x$  terms on LHS and RHS:

$-2x + kx = -3x$

$\therefore -2 + k = -3$

$\therefore k = -1$

$\therefore (x + 1)(x^2 + x - 2) = x^3 - 3x - 2$

$\therefore (x + 1)(x - 2)(x + 1) = 0$

$\therefore x = -1$  or  $x = 2$

6.  $x = 2$  is a solution since  $2(2)^3 + 5(2)^2 - 14(2) - 8 = 0$

$\therefore (x - 2)(2x^2 + kx + 4) = 2x^3 + 5x^2 - 14x - 8$

Compare  $x$  terms on LHS and RHS:

$-2kx + 4x = -14x$

$\therefore -2k + 4 = -14$

$\therefore -2k = -18$

$\therefore k = 9$

$\therefore (x - 2)(2x^2 + 9x + 4) = 2x^3 + 5x^2 - 14x - 8$

$\therefore (x - 2)(2x + 1)(x + 4) = 0$

$\therefore x = 2$  or  $x = -\frac{1}{2}$  or  $x = -4$

7.  $x = 2$  is a solution since  $(2)^3 + 7(2)^2 - 36 = 0$

$$\therefore (x - 2)(x^2 + kx + 18) = x^3 + 7x^2 - 36$$

Compare  $x$  terms on LHS and RHS:

$$-2kx + 18x = 0x$$

$$\therefore -2k + 18 = 0$$

$$\therefore -2k = -18$$

$$\therefore k = 9$$

$$\therefore (x - 2)(x^2 + 9x + 18) = x^3 + 7x^2 - 36$$

$$\therefore (x - 2)(x + 3)(x + 6) = 0$$

$$\therefore x = -2 \text{ or } x = -3 \text{ or } x = -6$$

8.  $x = -2$  is a solution since  $4(-2)^3 + 12(-2)^2 + 9(-2) + 2 = 0$

$$\therefore (x + 2)(4x^2 + kx + 1) = 4x^3 + 12x^2 + 9x + 2$$

Compare  $x$  terms on LHS and RHS:

$$x + 2kx = 9x$$

$$\therefore 1 + 2k = 9$$

$$\therefore 2k = 8$$

$$\therefore k = 4$$

$$\therefore (x + 2)(4x^2 + 4x + 1) = 4x^3 + 12x^2 + 9x + 2$$

$$\therefore (x + 2)(2x + 1)(2x + 1) = 0$$

$$\therefore x = -\frac{1}{2} \text{ or } x = -2$$

9.  $x = 3$  is a solution since  $(3)^3 + 2(3)^2 - 4(3) + 3 = 0$

$$\therefore (x - 3)(x^2 + kx - 1) = x^3 + 2x^2 - 4x + 3$$

Compare  $x$  terms on LHS and RHS:

$$-3kx - x = -4x$$

$$\therefore -3k - 1 = -4$$

$$\therefore -3k = -3$$

$$\therefore k = 1$$

$$\therefore (x - 3)(x^2 + x - 1) = x^3 + 2x^2 - 4x + 3$$

$$\therefore x - 3 = 0 \quad \text{or} \quad x^2 + x - 1 = 0$$

$$\therefore x = 3 \quad \quad \quad x = \frac{-1 \pm \sqrt{1 - 4(1)(-1)}}{2(1)}$$

$$x = \frac{-1 \pm \sqrt{5}}{2}$$

## Activity 2

1.  $f(6) = 0$

$$\therefore (x - 6) \text{ is a factor of } f(x)$$

$$\therefore f(x) = (x - 6)(6x^2 - x - 1)$$

$$\therefore f(x) = (x - 6)(3x + 1)(2x - 1)$$

$\therefore$  If  $f(x) = 0$ , then

$$\therefore x = 6 \text{ or } x = -\frac{1}{3} \text{ or } x = \frac{1}{2}$$

2.  $x^3 + 9x^2 + 26x + 16 = 3x + 1$   
 $\therefore x^3 + 9x^2 + 23x + 15 = 0$   
 $x = -1$  is a solution since  $(-1)^3 + 9(-1)^2 + 23(-1) + 15 = 0$   
 $\therefore (x + 1)(x^2 + 8x + 15) = 0$   
 $\therefore (x + 1)(x + 5)(x + 3) = 0$   
 $\therefore x = -1$  or  $x = -5$  or  $x = -3$

3. For co-ordinates of A and B, we have

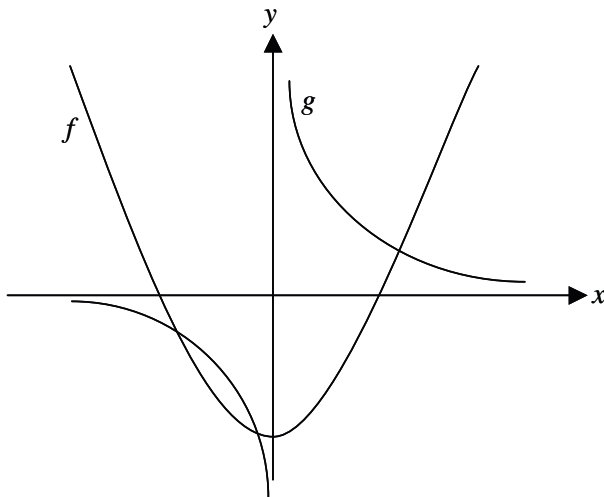
$\therefore x^3 = -3x^2 + x + 3$   
 $\therefore x^3 + 3x^2 - x - 3 = 0$   
 $\therefore x^2(x + 3) - (x + 3) = 0$   
 $\therefore (x + 3)(x^2 - 1) = 0$   
 $\therefore x = \pm 1$  or  $x = -3$

4. First, we must find the points of intersection. Therefore:

$x^2 - 7 = \frac{6}{x}$   
 $\therefore x^3 - 7x = 6$   
 $\therefore x^3 - 7x - 6 = 0$

Now,  $x = -1$  is a solution since  $(-1)^3 - 7(-1) - 6 = 0$

$\therefore (x + 1)(x^2 - x - 6) = 0$   
 $\therefore (x + 1)(x + 2)(x - 3) = 0$   
 $\therefore x = -1$  or  $x = -2$  or  $x = 3$



$\therefore$  Reading solution to  $\frac{6}{x} \geq x^2 - 7$  from graph, we get  
 $0 < x \leq 3$  or  $-2 \leq x \leq -1$